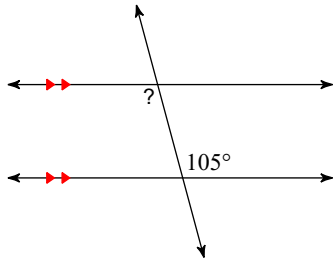


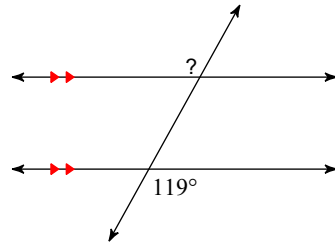
Assignment

Find the measure of each angle indicated.

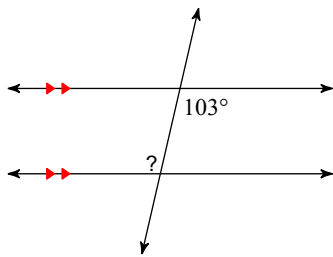
1)



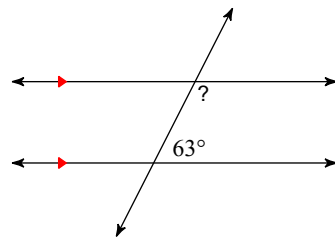
2)



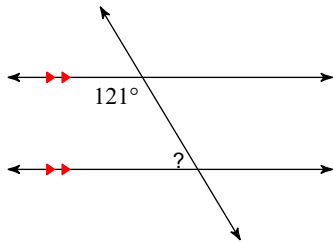
3)



4)

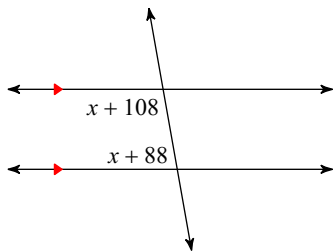


5)

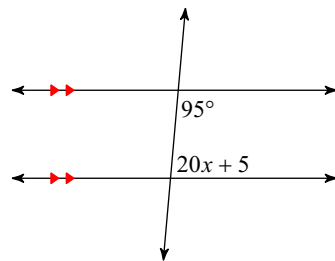


Solve for x .

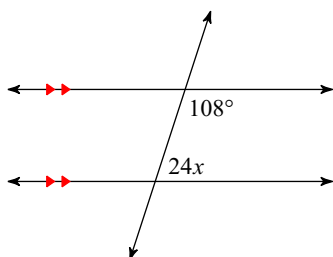
6)



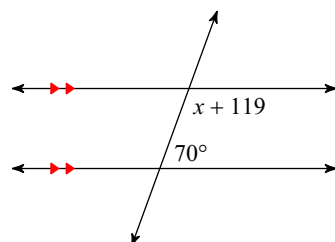
7)



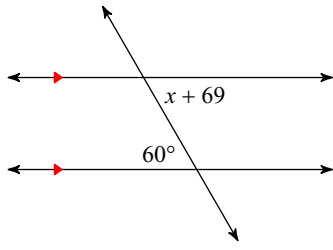
8)



9)



10)



Answers to Assignment (ID: 1)

- 1) 105°
- 5) 59°
- 9) -9

- 2) 119°
- 6) -8
- 10) -9

- 3) 103°
- 7) 4

- 4) 117°
- 8) 3